

NAMAGUNGA PRIMARY BOARDING SCHOOL

PRIMARY THREE REVISION SET(1) MAY-2020

LITERACY 1A

NAME: _____

STREAM: _____

INSTRUCTIONS:

1. Read well and answer all questions.
2. You must write well.
3. Write correct spellings and answer in full sentences where necessary.

SECTION A

1. Name one element of a good a map.

2. Name one result of a road accident.

3. Why should a school have trees around?

4. Give one source of food at home.

5. Why should school children put on uniforms?

6. Mention one cause of child abuse at home.

7. Why should people wear masks in public places today?

8. How do you keep your bedroom clean?

9. Give one example of a garden tool.

10. Why is your sister called a member of a nuclear family?


11. How is money useful at home?

12. Why is a goat called a domestic animal?

13. Name the product got from tobacco crop.

14. Give one building material used to build a temporary house.

15. Draw a map symbol of a dam.



16. Why is water transport difficult on rivers?

17. What do we call a person who makes furniture?

18. Which social service is provided by a teacher?

19. Give one problem faced by people in getting family needs.

20. Name one basic need got from a cow.

21. What religious holiday is celebrated on 3rd June every year?

22. What are recreation activities?

23. Which language is officially used to communicate at school?

24. How does the school benefit from neighbourhood?

25. Name one element of culture.

26. Why do people greet others?

27. How is a hospital important in our community?

28. Give one use of a compass direction to a map reader.

29. Name one important place found on Namagunga hill.

30. How is a timetable important in a classroom?

31. Write one way of living in peace at home with others.


32. Name the source of the raw-material used to make the craft below.



33. Why is the police invited on duty at school during Visitation days ?

34. What do you call a place where taxis park ?

35. What does the symbol below mean ?



36. What do you learn from the story of unforgiving servant?

37. Name one event that took place on Christmas day.

38. Name the fasting period for Muslims.

39. Who received the ten Commandments on Mt. Sinai ?

40. How do people worship God in your community ?

SECTION B

41. a) What is the meaning of the word cash crops?

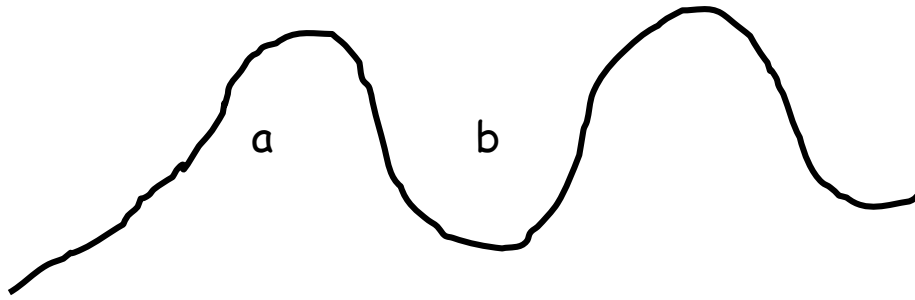
b) Name two traditional Cash- crops.

i) _____

ii) _____

c) Give one problem faced by farmers in your community.

42. Use the diagram below to answer;



a) Name the land form marked:

i) a _____

ii) b _____

b) Give two values of swamps.

i) _____

ii) _____

43. a) Give two examples of customs.

i) _____

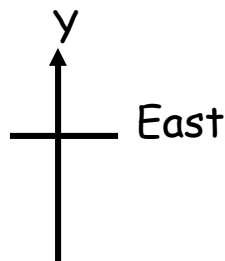
ii) _____

b) How are customs of value to people.

i) _____

ii) _____

44. Use the compass direction below to answer questions.



a) Name the compass direction that is directly opposite Y






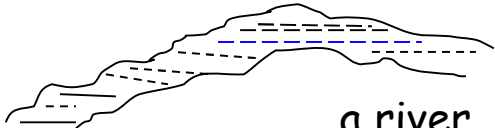
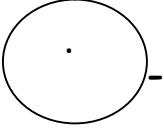

b) Mention two people who use a compass to do their work.

i) _____

ii) _____

b) Name the compass direction in which the sun sets.

45. Complete the table below correctly.

Maps	Pictures
i) 	 a hut
	ii)  _____
iii) 	 a river
	iv)  _____

46. a) Match list **A** to **B** correctly.

A

farmer

doctor

teacher

B

chalk

watering can

stethoscope

A

B

i) farmer

ii) doctor

iii) teacher


b) Why do we need drivers in our community?

47. a) What is communication?

b) Apart from communication, give one other use of a radio at home.

c) Give one example of a Newspaper in Uganda.

d) Draw one local means of communication.



48. a) What are wild animals ?

b) Name the habitat for a rabbit.

c) How are wild animals useful to people?

i) _____

ii) _____

49. Use the diagram below to answer questions.



a) What do the above colours of the traffic lights mean?

i) Red _____

ii) Yellow _____

iii) Green _____

b) Why are traffic lights put on busy roads?

50. a) Give two common accidents at home.

i) _____

ii) _____

b) Why is a fire extinguisher put at school?

c) Give one importance of neighbours in our community.

51. a) Name the things made by God on the following days:

i) First day _____

ii) Second day _____

b) Why was man created last?

c) "And He said, let us make man in our image and likeness"
(Genesis 1:26). Who said the words above?

52. a) What do we call the twelve followers of Jesus Christ?

b) Mention two examples of the twelve followers of Jesus Christ.

i) _____

ii) _____

c) Name the follower who betrayed Jesus Christ.

53. a) On which day do Christians go for general prayers?

b) Why do people pray?

i) _____

ii) _____

c) Who is the earthly father of Jesus?

54. a) What do we call a person who is given authority to guide and counsel others?

b) State two duties of your class monitors as leaders.

i) _____

ii) _____

c) What do you learn from Jesus as a good leader?

55. Match correctly:

A

Easter Sunday

Palm Sunday

Good Friday

Holy Thursday

B

Jesus died on the Cross

Jesus rosed from the dead

Jesus washed the disciples' feet

Jesus entered Jerusalem Triumphantly

STAY HOME STAY SAFE

END